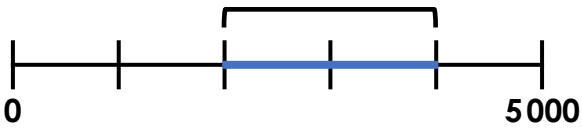


My Number

Task A

My number is in this section.



My number includes the digits **4** and **6**.

The tens digit is **5**.

What could my number be?

Level 1: Find an answer

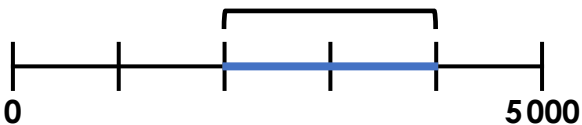
Level 2: Find different answers

Level 3: Find all the possible answers

My Number

Task A

My number is in this section.



My number includes the digits **4** and **6**.

The tens digit is **5**.

What could my number be?

Level 1: Find an answer

Level 2: Find different answers

Level 3: Find all the possible answers

My Number

Task A

My number is in this section.



My number includes the digits **4** and **6**.

The tens digit is **5**.

What could my number be?

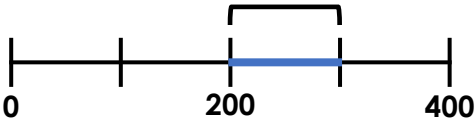
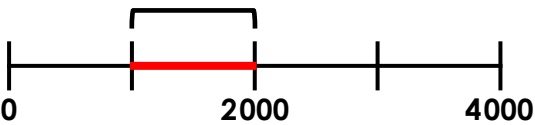
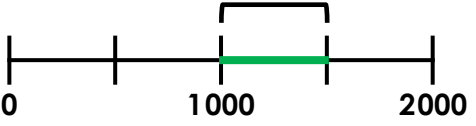
Level 1: Find an answer

Level 2: Find different answers

Level 3: Find all the possible answers

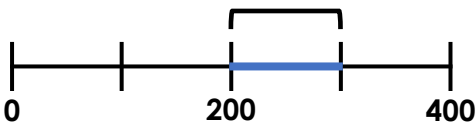
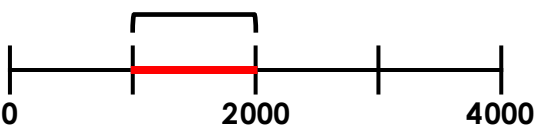
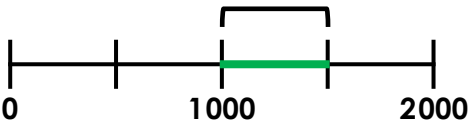
My Number

Task B Version 1

Question:	Possible answers:
<p>My number is in this section.</p>  <p>A number line from 0 to 400 with major tick marks at 0, 200, and 400. A blue segment is highlighted between 200 and 300. A bracket above the line spans from 200 to 300.</p>	<p>My number includes the digit 6.</p> <p>My number is odd.</p>
<p>My number is in this section.</p>  <p>A number line from 0 to 4000 with major tick marks at 0, 2000, and 4000. A red segment is highlighted between 1000 and 2000. A bracket above the line spans from 1000 to 2000.</p>	<p>My number includes the digits 0, 1, 3, 6.</p> <p>My number is odd.</p>
<p>My number is in this section.</p>  <p>A number line from 0 to 2000 with major tick marks at 0, 1000, and 2000. A green segment is highlighted between 1000 and 1500. A bracket above the line spans from 1000 to 1500.</p>	<p>My number includes the digit 3.</p> <p>The tens digit is 8.</p> <p>My number is even.</p>

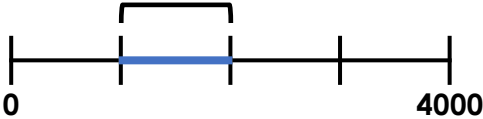
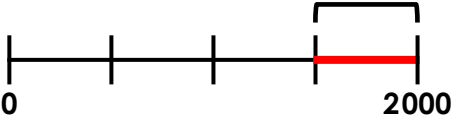
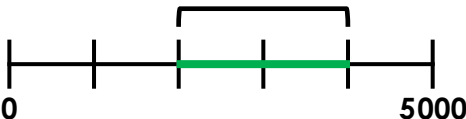
My Number

Task B Version 1

Question:	Possible answers:
<p>My number is in this section.</p>  <p>A number line from 0 to 400 with major tick marks at 0, 200, and 400. A blue segment is highlighted between 200 and 300. A bracket above the line spans from 200 to 300.</p>	<p>My number includes the digit 6.</p> <p>My number is odd.</p>
<p>My number is in this section.</p>  <p>A number line from 0 to 4000 with major tick marks at 0, 2000, and 4000. A red segment is highlighted between 1000 and 2000. A bracket above the line spans from 1000 to 2000.</p>	<p>My number includes the digits 0, 1, 3, 6.</p> <p>My number is odd.</p>
<p>My number is in this section.</p>  <p>A number line from 0 to 2000 with major tick marks at 0, 1000, and 2000. A green segment is highlighted between 1000 and 1500. A bracket above the line spans from 1000 to 1500.</p>	<p>My number includes the digit 3.</p> <p>The tens digit is 8.</p> <p>My number is even.</p>

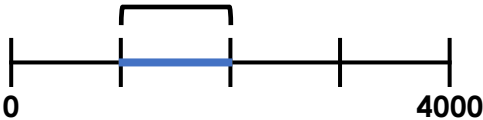
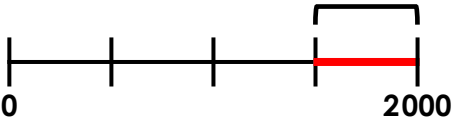
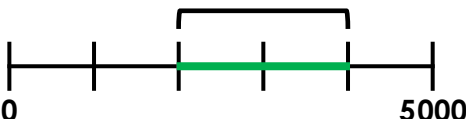
My Number

Task B Version 2

Question:	Possible answers:
<p>My number is in this section.</p> 	<p>My number includes the digits 6 and 4. It doesn't include the digits 3, 5 or 7. My number is odd.</p>
<p>My number is in this section.</p> 	<p>My number includes the digits 1, 2, 3, 6. My number is even.</p>
<p>My number is in this section.</p> 	<p>My number includes the digits 1, 7 and 8. My number is even.</p>

My Number

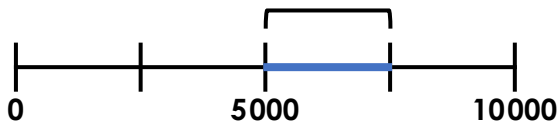
Task B Version 2

Question:	Possible answers:
<p>My number is in this section.</p> 	<p>My number includes the digits 6 and 4. It doesn't include the digits 3, 5 or 7. My number is odd.</p>
<p>My number is in this section.</p> 	<p>My number includes the digits 1, 2, 3, 6. My number is even.</p>
<p>My number is in this section.</p> 	<p>My number includes the digits 1, 7 and 8. My number is even.</p>

My Number

Extend

My number is in this section.



The digits in my number: **4 5 7 8**

My number is **odd**.

What could my number be?

Level 1: Find an answer

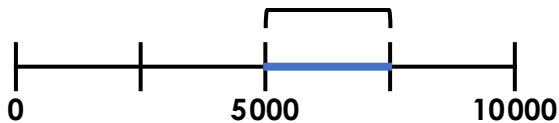
Level 2: Find different answers

Level 3: Find all the possible answers

My Number

Extend

My number is in this section.



The digits in my number: **4 5 7 8**

My number is **odd**.

What could my number be?

Level 1: Find an answer

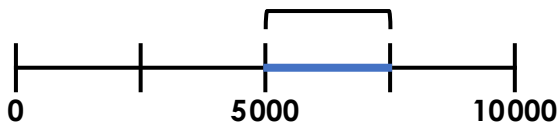
Level 2: Find different answers

Level 3: Find all the possible answers

My Number

Extend

My number is in this section.



The digits in my number: **4 5 7 8**

My number is **odd**.

What could my number be?

Level 1: Find an answer

Level 2: Find different answers

Level 3: Find all the possible answers

My Number

Answers

Task A:

2456, 2654, 3456, 3654

Task B Version 1 Example Answers:

Q1: 361, 365

Q2: 1063, 1603 (the only answers)

Q3: 1382, 1386

Task B Version 2 Example Answers:

Q1: 1641, 1469

Q2: 1632 (the only answer)

Q3: 2178, 3718

Extend:

5487, 5847, 7485