

More Than, Less Than

Task A

Question:	Part-finished picture:	Which Answer?
<p>Ben has 7 pencils.</p> <p>Ben has 2 more pencils than Tim.</p> <p>How many pencils does Tim have?</p>	<p>Ben</p> <p>Tim</p>	<p>5</p> <p>9</p>
<p>Kate has 6 hats.</p> <p>Zara has 4 fewer hats than Kate.</p> <p>How many hats does Zara have?</p>	<p>Kate</p> <p>Zara</p>	<p>2</p> <p>10</p>
<p>Zack has 6 t-shirts.</p> <p>Zack has 4 fewer t-shirts than Max.</p> <p>How many t-shirts does Max have?</p>	<p>Zack</p> <p>Max</p>	<p>2</p> <p>10</p>

More Than, Less Than

Task A

Question:	Part-finished picture:	Which Answer?
<p>Ben has 7 pencils.</p> <p>Ben has 2 more pencils than Tim.</p> <p>How many pencils does Tim have?</p>	<p>Ben</p> <p>Tim</p>	<p>5</p> <p>9</p>
<p>Kate has 6 hats.</p> <p>Zara has 4 fewer hats than Kate.</p> <p>How many hats does Zara have?</p>	<p>Kate</p> <p>Zara</p>	<p>2</p> <p>10</p>
<p>Zack has 6 t-shirts.</p> <p>Zack has 4 fewer t-shirts than Max.</p> <p>How many t-shirts does Max have?</p>	<p>Zack</p> <p>Max</p>	<p>2</p> <p>10</p>

More Than, Less Than

Task B Version 1

Question:	Answer:
<p>Jack has 5 pens.</p> <p>Jack has 2 fewer pens than Kam.</p> <p>How many pens does Kam have?</p>	<p>Jack </p> <p>Kam </p> <p>Answer:</p>
<p>Jen has 4 sweets.</p> <p>Amy has 3 fewer sweets than Jen.</p> <p>How many sweets do Jen and Amy have altogether?</p>	<p>Jen </p> <p>Amy </p> <p>Answer:</p>
<p>Eve has 4 pencils.</p> <p>Kim has 3 more pencils than Eve.</p> <p>How many pencils do Eve and Kim have altogether?</p>	<p>Eve </p> <p>Kim </p> <p>Answer: <i>The answer is not 7 pencils.</i></p>

More Than, Less Than

Task B Version 1

Question:	Answer:
<p>Jack has 5 pens.</p> <p>Jack has 2 fewer pens than Kam.</p> <p>How many pens does Kam have?</p>	<p>Jack </p> <p>Kam </p> <p>Answer:</p>
<p>Jen has 4 sweets.</p> <p>Amy has 3 fewer sweets than Jen.</p> <p>How many sweets do Jen and Amy have altogether?</p>	<p>Jen </p> <p>Amy </p> <p>Answer:</p>
<p>Eve has 4 pencils.</p> <p>Kim has 3 more pencils than Eve.</p> <p>How many pencils do Eve and Kim have altogether?</p>	<p>Eve </p> <p>Kim </p> <p>Answer: <i>The answer is not 7 pencils.</i></p>

More Than, Less Than

Task B Version 2

Question:	Answer:
<p>Jack has 18 marbles. Jack has 4 fewer marbles than Kam.</p> <p>How many marbles does Kam have?</p>	<p>Jack <input type="text" value="18"/></p> <p>Kam</p>
<p>Jen has 20 paperclips. Amy has 6 fewer paperclips than Jen.</p> <p>How many paperclips do Jen and Amy have in total?</p>	<p><input type="text"/></p> <p><input type="text"/></p>
<p>Eve has £20. Kim has £6 more than Eve.</p> <p>How much money do Eve and Kim have altogether?</p>	<p><input type="text"/></p> <p><input type="text"/></p>



More Than, Less Than

Task B Version 2

Question:	Answer:
<p>Jack has 18 marbles. Jack has 4 fewer marbles than Kam.</p> <p>How many marbles does Kam have?</p>	<p>Jack <input type="text" value="18"/></p> <p>Kam</p>
<p>Jen has 20 paperclips. Amy has 6 fewer paperclips than Jen.</p> <p>How many paperclips do Jen and Amy have in total?</p>	<p><input type="text"/></p> <p><input type="text"/></p>
<p>Eve has £20. Kim has £6 more than Eve.</p> <p>How much money do Eve and Kim have altogether?</p>	<p><input type="text"/></p> <p><input type="text"/></p>



More Than, Less Than

Extend

Question:	Missing Information:
Beth has £25. Beth has <input type="text"/>  How much money does Rose have?	Answer: £18
Kam has <input type="text"/>  Tom has £2 more than Kam. How much money do Tom and Kam have altogether?	Answer: £12



More Than, Less Than

Extend

Question:	Missing Information:
Beth has £25. Beth has <input type="text"/>  How much money does Rose have?	Answer: £18
Kam has <input type="text"/>  Tom has £2 more than Kam. How much money do Tom and Kam have altogether?	Answer: £12

More Than, Less Than

Extend

Question:	Missing Information:
Beth has £25. Beth has <input type="text"/>  How much money does Rose have?	Answer: £18
Kam has <input type="text"/>  Tom has £2 more than Kam. How much money do Tom and Kam have altogether?	Answer: £12