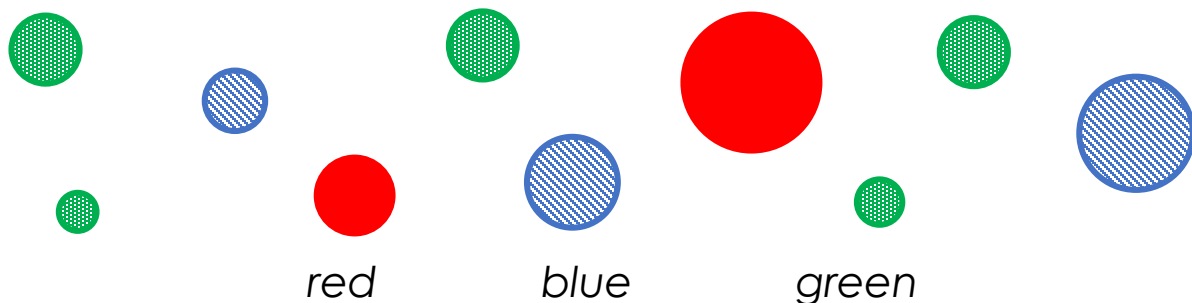


Read the Picture

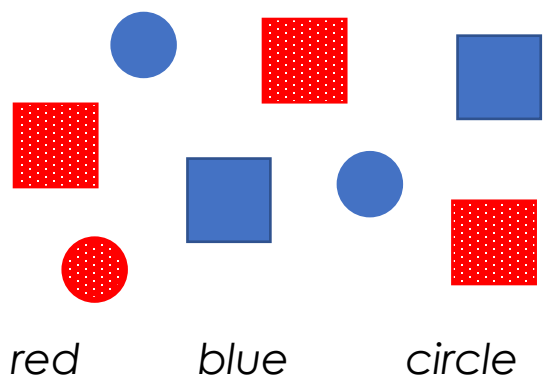
There are more **blue** circles than _____ circles.

There are less _____ circles than _____ circles.

There are more _____ than _____



Read the Picture



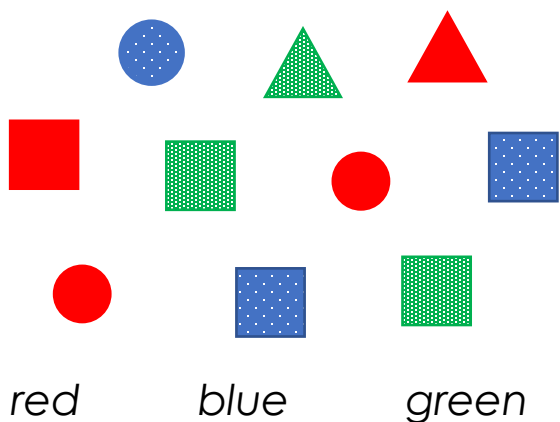
There are 3 _____

There are 4 _____

There are 5 _____

square

Read the Picture

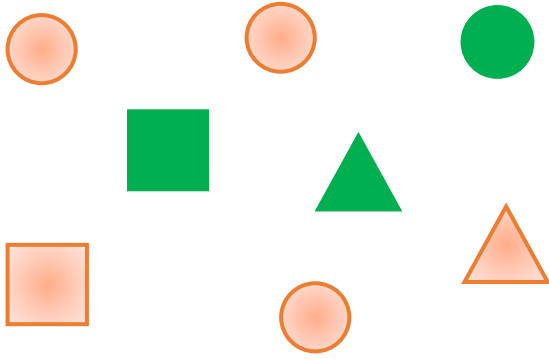


There are 3 _____

There are 4 _____

There are 5 _____

Read the Picture



There are shapes


There are green shapes

There are squares

There are circles

Agree or Disagree?

✓ or ✗



more circles than squares

11 shapes


More red circles than green shapes

Read the Pictures

shapes in total

red shapes


squares



shapes in total

blue shapes

squares



Explore

4 shapes in total.
 2 blue shapes.
 3 circles.

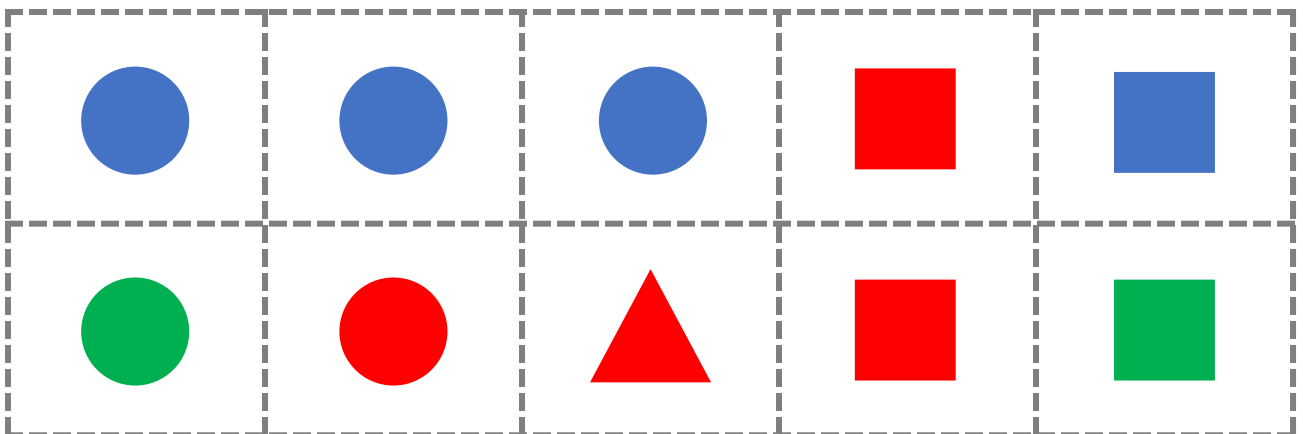
Extend: find
 different answers!

--	--	--	--

4 shapes in total.
 1 red shape.
 2 squares.


Extend: find
 different answers!

--	--	--	--

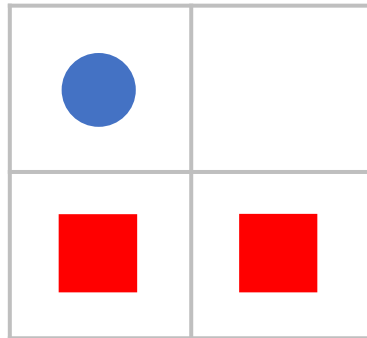


Finish the Pictures

4 shapes in total.
2 green shapes.
3 circles.




4 shapes in total.
3 red shapes.
2 circles.



Finish the Pictures

3 shapes in total.
1 red shape.
2 circles.

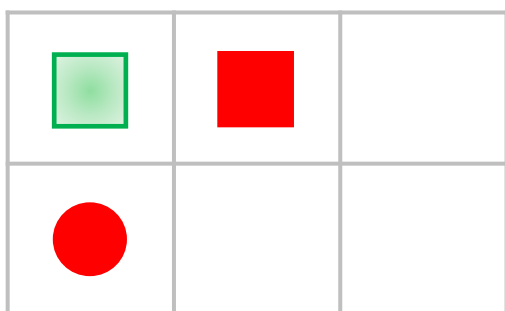


3 shapes in total.
2 blue shapes.
1 square.



Finish the Pictures

6 shapes in total.
4 red shapes.
3 circles.



6 shapes in total.
4 blue shapes.
1 square.

