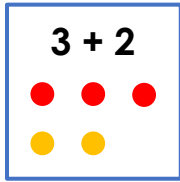


Which Picture?

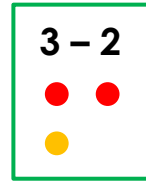
Task A

Kate has 3 apples. Tom has 2 apples.

How many apples in total?

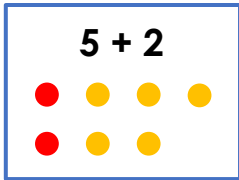


Which Picture?

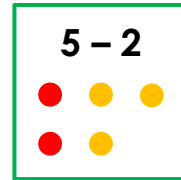


In total, Lee and Ben have 5 sweets. Lee has 2 sweets.

How many sweets does Ben have?

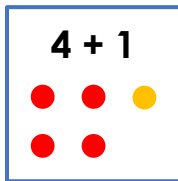


Which Picture?

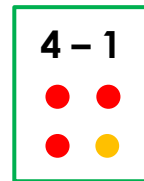


Kim has 4 dogs. 1 dog is outside.

How many dogs are inside?

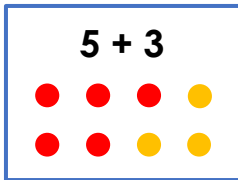


Which Picture?

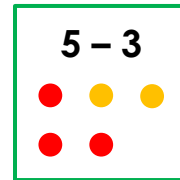


There are 5 adults and 3 children in the shop.

How many people are in the shop?



Which Picture?



There are 6 windows. 2 windows are closed.

How many windows are open?

Draw the picture:

Which Picture?

Task B

Question:	Picture:	Number Sentence:
There are 5 apples. 3 of the apples are red. How many apples are green?		$5 + 3$ OR $5 - 3$

Question:	Picture:	Number Sentence:
There are 6 spotty balls. There are 4 stripy balls. How many balls in total?		$6 + 4$ OR $6 - 4$

Question:	Picture:	Number Sentence:
There are 7 people at the park. There are 3 adults at the park. How many children at the park?		$7 + 3$ OR $7 - 3$

Question:	Picture:	Number Sentence:
Tim has 5 sweets. Mo has 2 more sweets than Tim. How many sweets does Mo have?		$5 + 2$ OR $5 - 2$

Question:	Picture:	Number Sentence:
		$5 + 2$ OR $5 - 2$

Missing Words

Task A Version 1

<p>There were 8 people on the bus.</p> <p>information</p> <p>How many people left on the bus?</p>	<p>Then, 2 people got off the bus.</p> <p>OR</p> <p>There were 2 boys on the bus.</p>
<p>There were 8 frogs in the pond.</p> <p>There were 2 frogs on the lily pad.</p> <p>question</p>	<p>There are 3 frogs on the grass.</p> <p>OR</p> <p>How many frogs in total?</p>
<p>information</p> <p>Then, 5 balloons popped.</p> <p>How many balloons are left?</p>	<p>There were 3 balloons.</p> <p>OR</p> <p>There were 9 balloons.</p>
<p>There are 6 people at the table.</p> <p>information</p> <p>How many children at the table?</p>	<p>There are 4 adults at the table.</p> <p>OR</p> <p>There are 4 girls at the table.</p>

Missing Words

Task A Version 1

<p>There were 8 people on the bus.</p> <p>information</p> <p>How many people left on the bus?</p>	<p>Then, 2 people got off the bus.</p> <p>OR</p> <p>There were 2 boys on the bus.</p>
<p>There were 8 frogs in the pond.</p> <p>There were 2 frogs on the lily pad.</p> <p>question</p>	<p>There are 3 frogs on the grass.</p> <p>OR</p> <p>How many frogs in total?</p>
<p>information</p> <p>Then, 5 balloons popped.</p> <p>How many balloons are left?</p>	<p>There were 3 balloons.</p> <p>OR</p> <p>There were 9 balloons.</p>
<p>There are 6 people at the table.</p> <p>information</p> <p>How many children at the table?</p>	<p>There are 4 adults at the table.</p> <p>OR</p> <p>There are 4 girls at the table.</p>

Missing Words

Task A Version 2

There were 8 people on the bus.

information



How many people left on the bus?

There were 8 frogs in the pond.

There were 2 frogs on the lily pad.

question



information



Then, 5 balloons popped.

How many balloons are left?

There are 6 people at the table.

information



How many children at the table?

Missing Words

Task A Version 2

There were 8 people on the bus.

information



How many people left on the bus?

There were 8 frogs in the pond.

There were 2 frogs on the lily pad.

question



information



Then, 5 balloons popped.

How many balloons are left?

There are 6 people at the table.

information



How many children at the table?