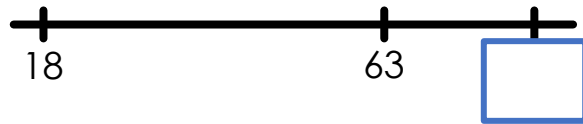
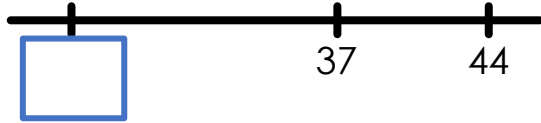
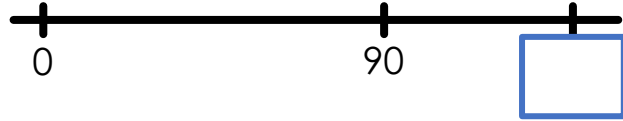


## Extend

Estimate the value of the missing numbers:



### Answer

Approximate values: 0-16-**56**; 0-90-**140**; **23**-37-44; 18, 63, **83**.