



## Task A

For each clock, draw the missing hand:


**6:00**




**10:05**




**5:40**




**3:30**



**5:10**




**7:45**




## Task B

For each clock, draw the missing hand(s):


**5:05**




**5:40**



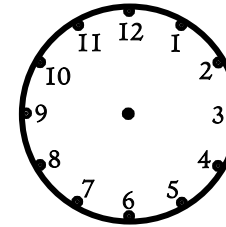
**20:30**



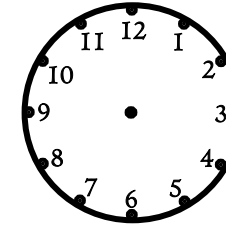
**19:45**



**22:22**



**15:37**



# Answers

## Task A

For each clock, draw the missing hand:

6:00



10:05



5:40



3:30



5:10



7:45



## Task B

For each clock, draw the missing hand(s):

5:05



5:40



20:30



19:45



22:22



15:37

