



Task A

For each clock, draw the missing hand(s):

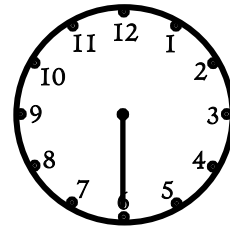
5:05




5:40



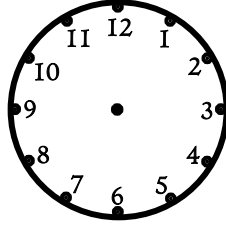
8:30



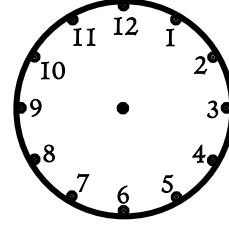
7:45



10:10






3:20



Task B

For each clock, estimate the time:



Extend

The [Nrich Task: Clocks](#) is your extend task!

Answers

Task A: [This interactive clock](#) can be used to check your answers.

Task B Estimates: 2:15 7:15 10:40

Extend: [Here are the answers](#)