

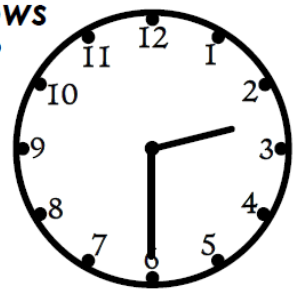
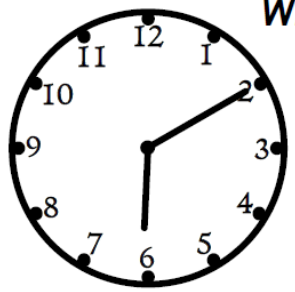
# Which answer?

A clock face with the hour hand between 3 and 4 and the minute hand at 6. A red callout bubble points to the hour hand and says "Half past 3". A blue callout bubble points to the minute hand and says "Half past 4".

A clock face with the hour hand between 8 and 9 and the minute hand at 6. A green callout bubble points to the hour hand and says "Half past 8". A blue callout bubble points to the minute hand and says "Half past 9".

# Which clock?

Which clock shows half past two?



# Missing hand

Draw the missing hand on each clock.

7:00pm

A clock face with the minute hand at 12 and the hour hand at 7.

10:30am

A clock face with the minute hand at 6 and the hour hand at 10.

9:30pm

A clock face with the minute hand at 6 and the hour hand at 9.

8:10pm

A clock face with the minute hand at 2 and the hour hand at 8.

7:15am

A clock face with the minute hand at 3 and the hour hand at 7.

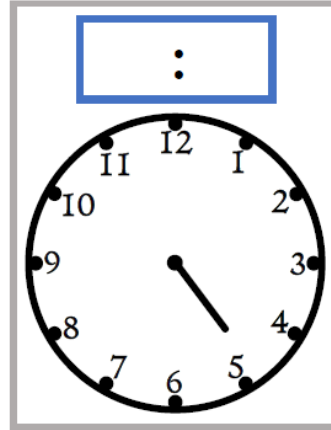
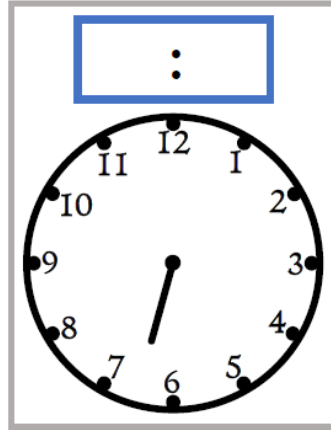
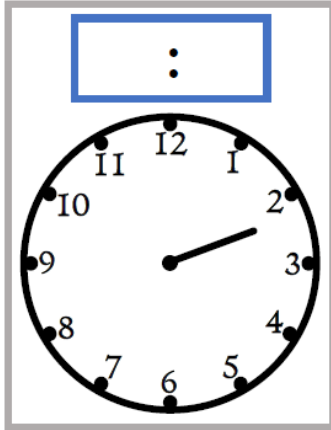
2:40pm

A clock face with the minute hand at 8 and the hour hand at 2.

# Estimate

The minute hand is missing on each clock.

**Estimate the times.**



## Answers

**Which Answer?** 3:30    8:30

**Which Clock?** Right-hand clock

**Missing Clock:** [This interactive clock](#) can be used to check your answers.

**Estimate Estimates:** 2:15    6:40    4:55