
















## Puzzle A

			17
			18
10	9	16	







Work out the value of each shape:

## Puzzle B

			23
			24
			26
26	20	27	

Work out the value of each shape:

## Puzzle C

			20
			6
5	12	9	

Work out the value of each shape:

[This website](#) was used to generate the puzzles.

**Answers are on the next page.**

**Answers:****Puzzle A:** Rectangle = 8   Square = 2   Circle = 7**Puzzle B:** Star = 9   Semi-circle = 8   Square = 6**Puzzle C:** Hexagon = 1   Rectangle = 4   Circle = 8