

# Going surfing

**It costs £7 to hire a surfboard plus £3 per half-hour used.**

Kate goes surfing for 3 hours. It costs her  to hire the surfboard.

Jack goes surfing for  hours. It costs him £34 to hire the surfboard.

**starting cost**



**£7**

# Going surfing

It costs **£7** to hire a surfboard plus **£3** per half-hour used.

Kate goes surfing for 3 hours. It costs her  to hire the surfboard.

Jack goes surfing for  hours. It costs him £34 to hire the surfboard.

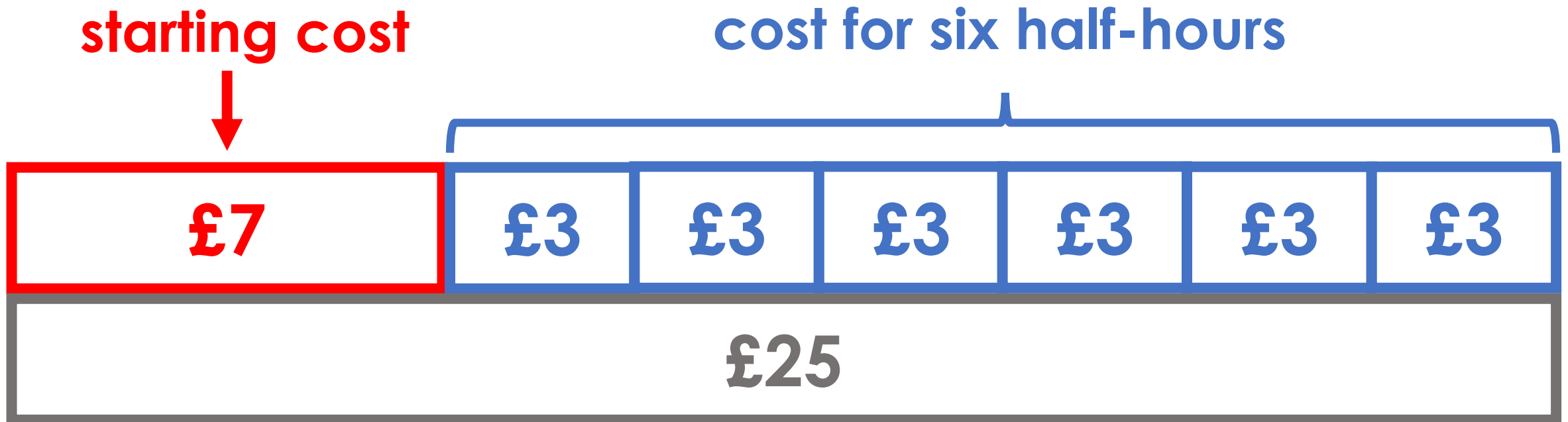


# Going surfing

It costs **£7** to hire a surfboard plus **£3** per half-hour used.

Kate goes surfing for 3 hours. It costs her  to hire the surfboard.

Jack goes surfing for  hours. It costs him £34 to hire the surfboard.



**Total cost = £25**

# Going surfing

**It costs £7 to hire a surfboard plus £3 per half-hour used.**

Kate goes surfing for 3 hours. It costs her  to hire the surfboard.

Jack goes surfing for  hours. It costs him £34 to hire the surfboard.

**starting cost**



**£7**

**£34**

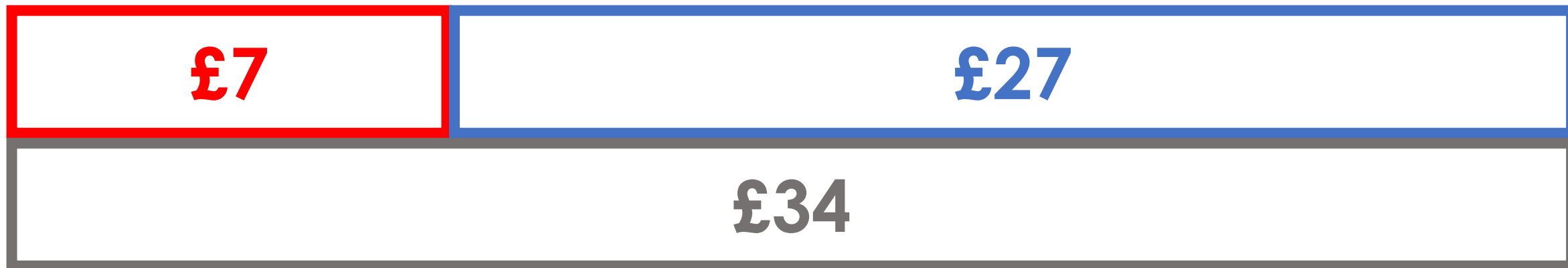
# Going surfing

It costs £7 to hire a surfboard plus £3 per half-hour used.

Kate goes surfing for 3 hours. It costs her  to hire the surfboard.

Jack goes surfing for  hours. It costs him £34 to hire the surfboard.

**starting cost**



# Going surfing

It costs **£7** to hire a surfboard plus **£3** per half-hour used.

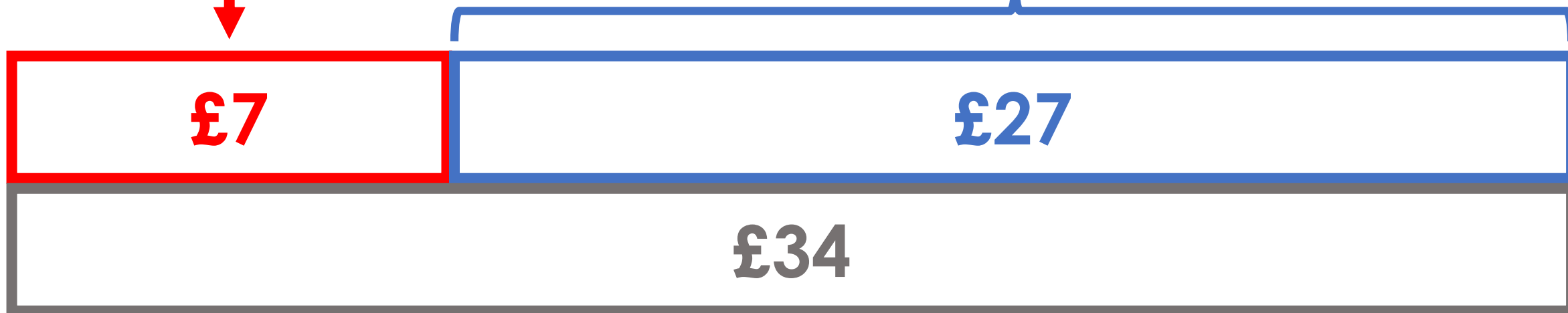
Kate goes surfing for 3 hours. It costs her  to hire the surfboard.

Jack goes surfing for  hours. It costs him **£34** to hire the surfboard.

**starting cost**



How many **£3s** in **£27**?



# Going surfing

It costs £7 to hire a surfboard plus £3 per half-hour used.

Kate goes surfing for 3 hours. It costs her  to hire the surfboard.

Jack goes surfing for  hours. It costs him £34 to hire the surfboard.



# Going surfing

It costs £7 to hire a surfboard plus £3 per half-hour used.

Kate goes surfing for 3 hours. It costs her  to hire the surfboard.

Jack goes surfing for  hours. It costs him £34 to hire the surfboard.



Jack goes surfing for  $4\frac{1}{2}$  hours